



MMTA Course Two – Geocosmic Correlations to Long-Term Cycles in Financial Markets



Applying Long-Term Planet-Sign Correlations to Other Financial Markets

Module Lesson Twelve



Disclaimer and Appropriate Use of Course Information: The content and instruction made throughout this course are provided solely for reference and educational purposes to students, traders, and analysts (Participants).

By participating in this course, you agree that all trading or investment decisions made by Participant are at the sole risk to the Participant and Participant assumes all responsibility for any and all decisions made in financial markets.

By taking this course, you also acknowledge that trading in financial markets involves risk of loss as well as the potential for gains. As a student, trader, or investor, you agree to assume all responsibility for any and all actions you initiate in financial markets, and neither the authors, instructors, or publishers affiliated with this course, or anyone whose work is cited or referenced in the course, assumes any liability whatsoever for your decisions.

Futures or options trading are considered high risk. Information provided in the MMTA course or MMA publications is provided with sincere intent, and according to MMA's own proprietary and copyrighted processes and methodologies. All content and information provided is the intellectual property of MMA and MMTA developed by Raymond Merriman and his 40+ years of experience, observation, and research. Students may use this material responsibly and solely for their own trading and investment planning. They may cite brief sections of these studies with proper credit to MMA or MMTA. However, any other reproduction or use of this copyrighted material must be with the written consent of MMA.

This module lesson will be an exercise, to reinforce the manner in which to identify planet-sign correlations to long-term cycles in other financial and commodity markets

In this exercise, students will take a long-term chart and identify the following:

1.) Long-term cycle troughs and crests

2.) Sign positions of Pluto, Neptune, and Uranus at the time of those long-term cycles

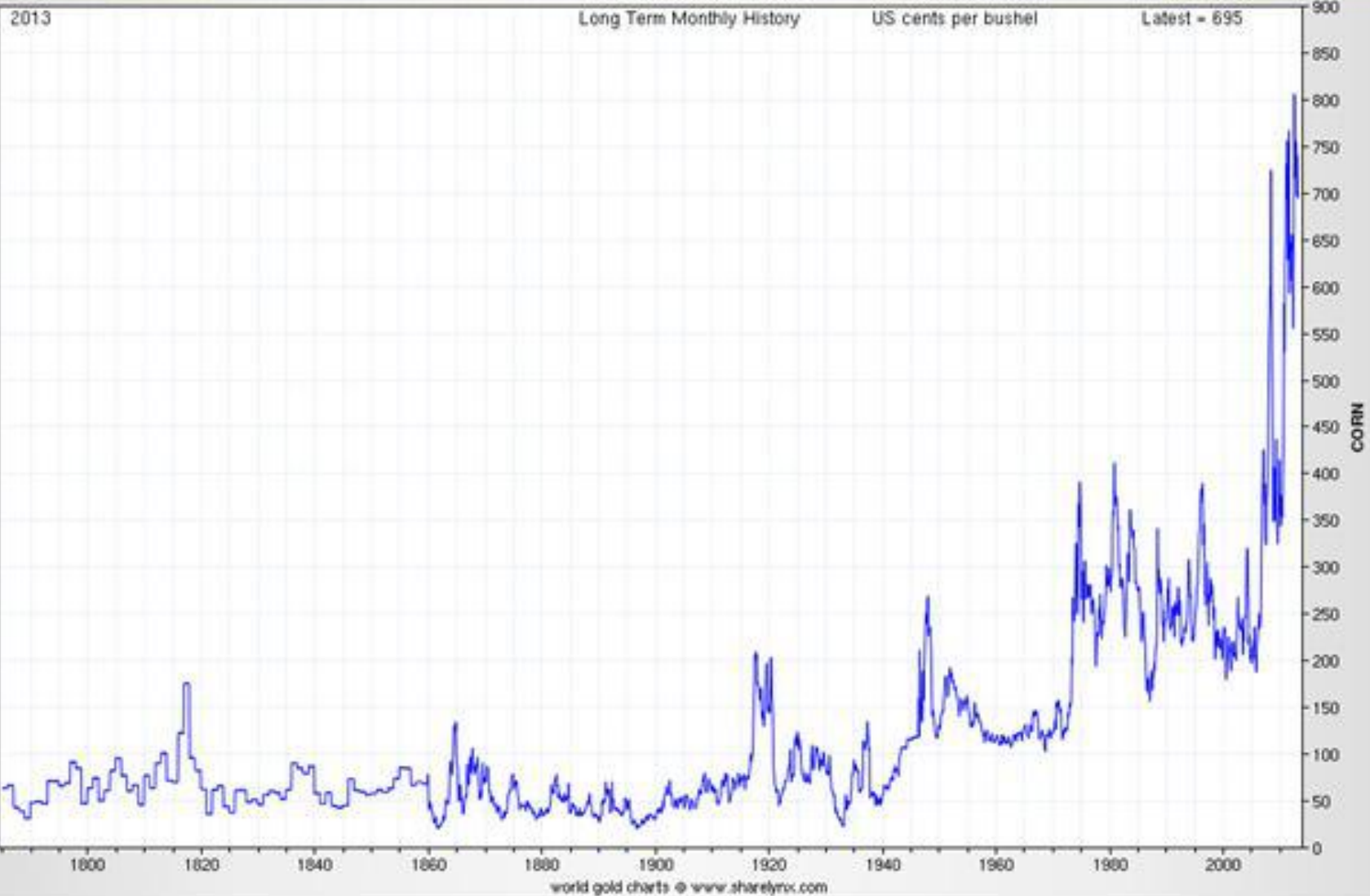
3.) Determine if there are any planet-sign correlations of Pluto, Neptune, or Uranus to these long-term market cycles

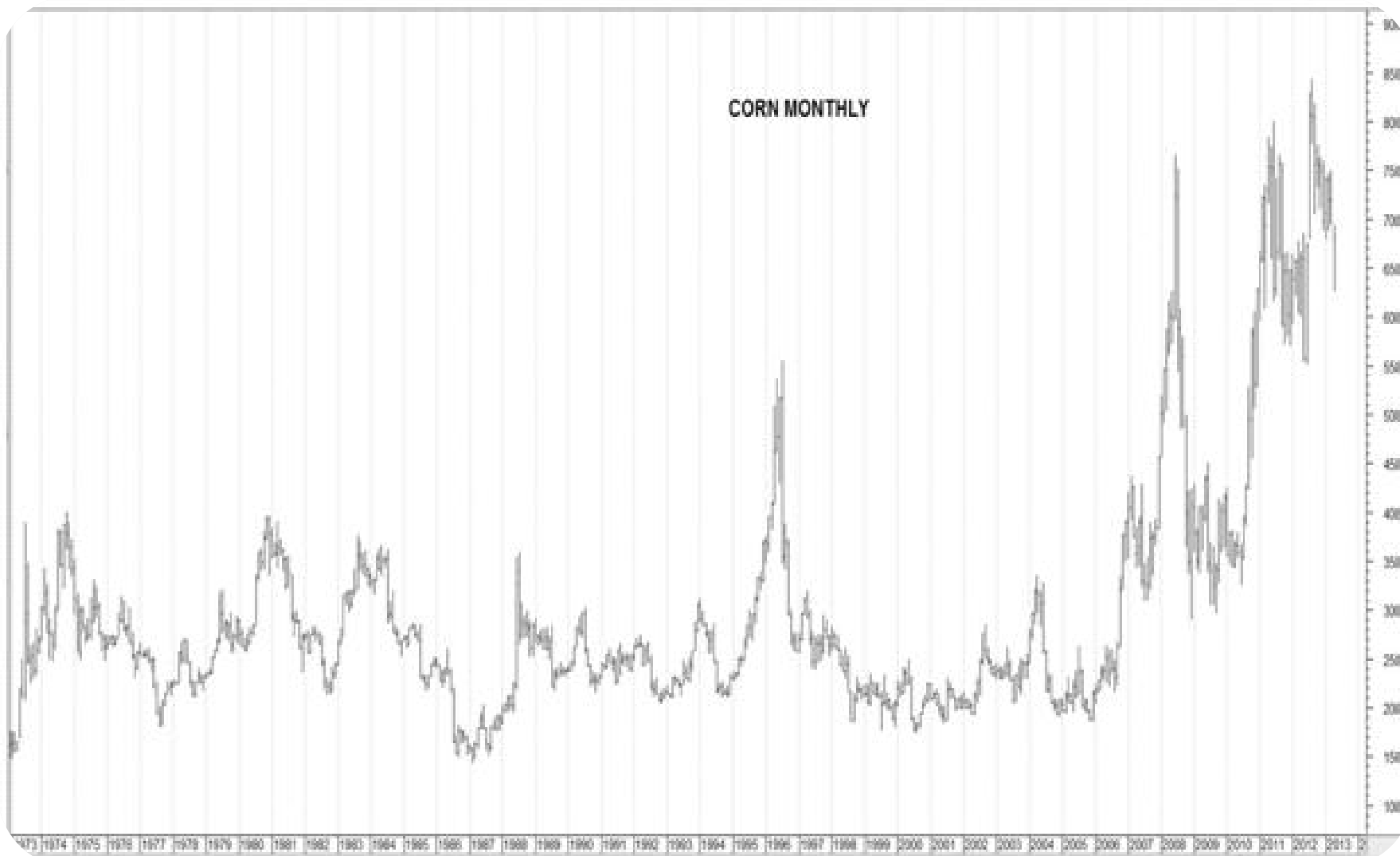
4.) Use shorter-term monthly charts to see if there are further correlations between the sign positions of Saturn and the Moon's North Node

For this exercise, you will choose to work from a long-term chart of Corn, Wheat, or Silver.

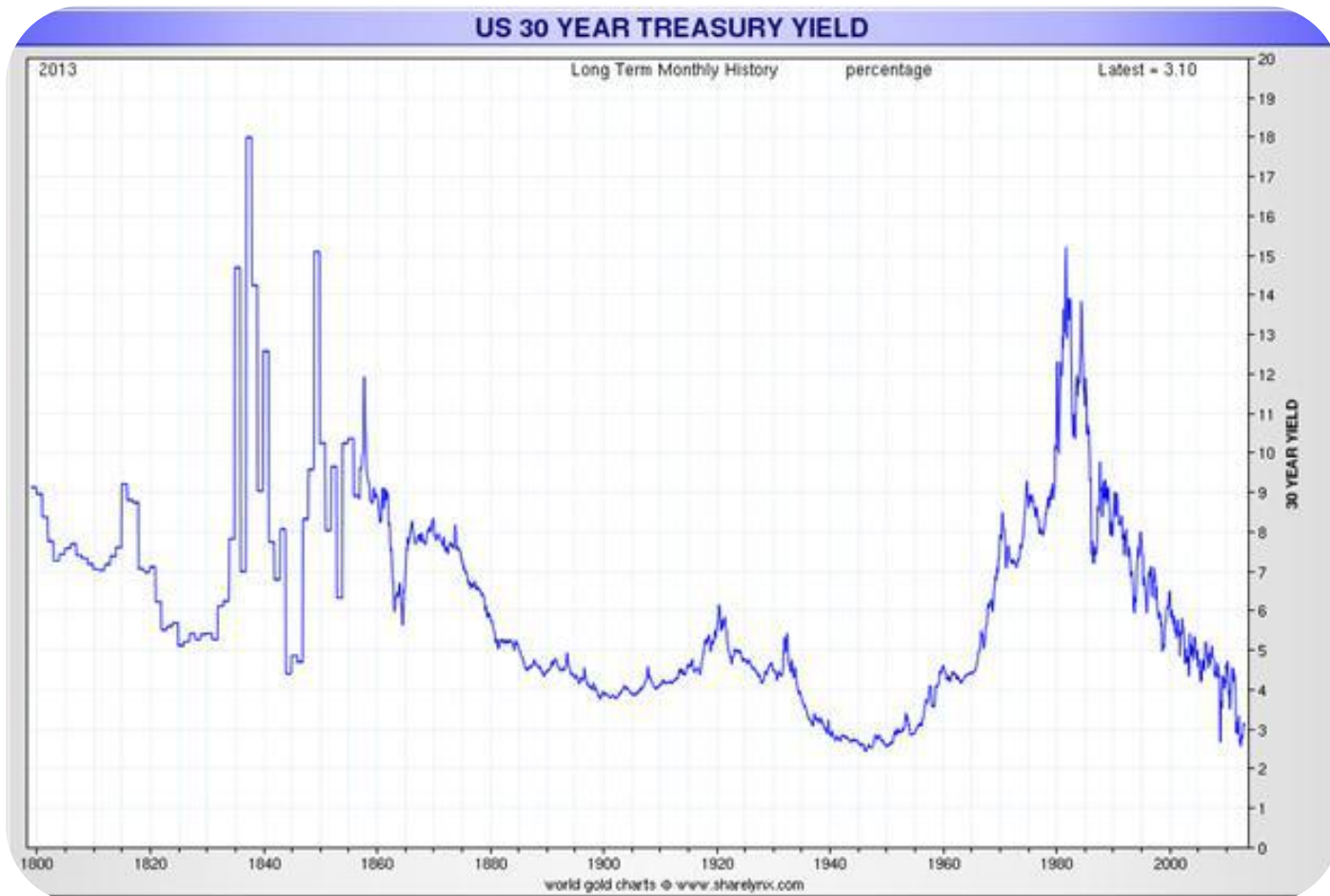
The following long-term charts of these markets are from Nick Laird at www.ChartsRus.com, as well as Metastock.com

CORN

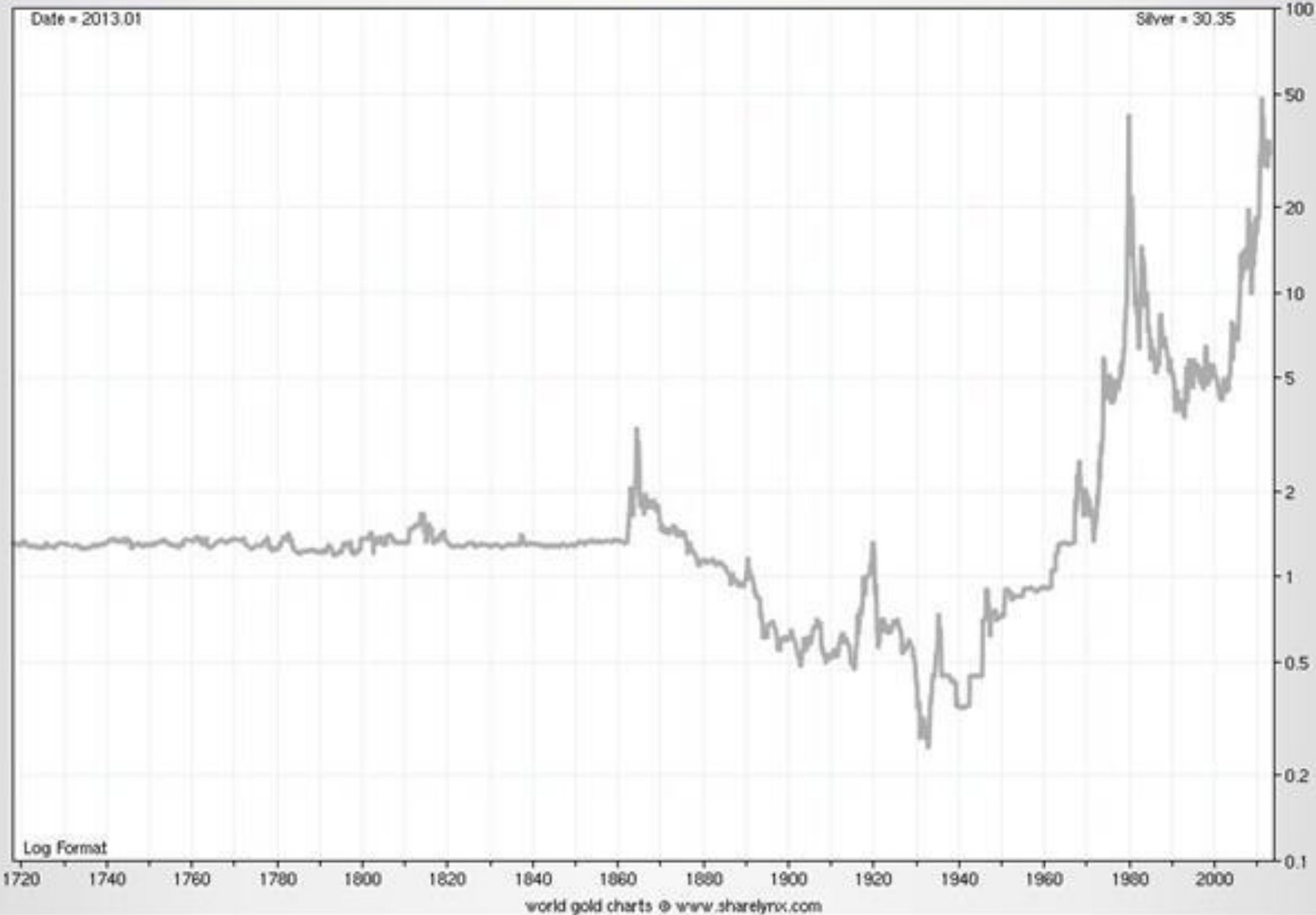


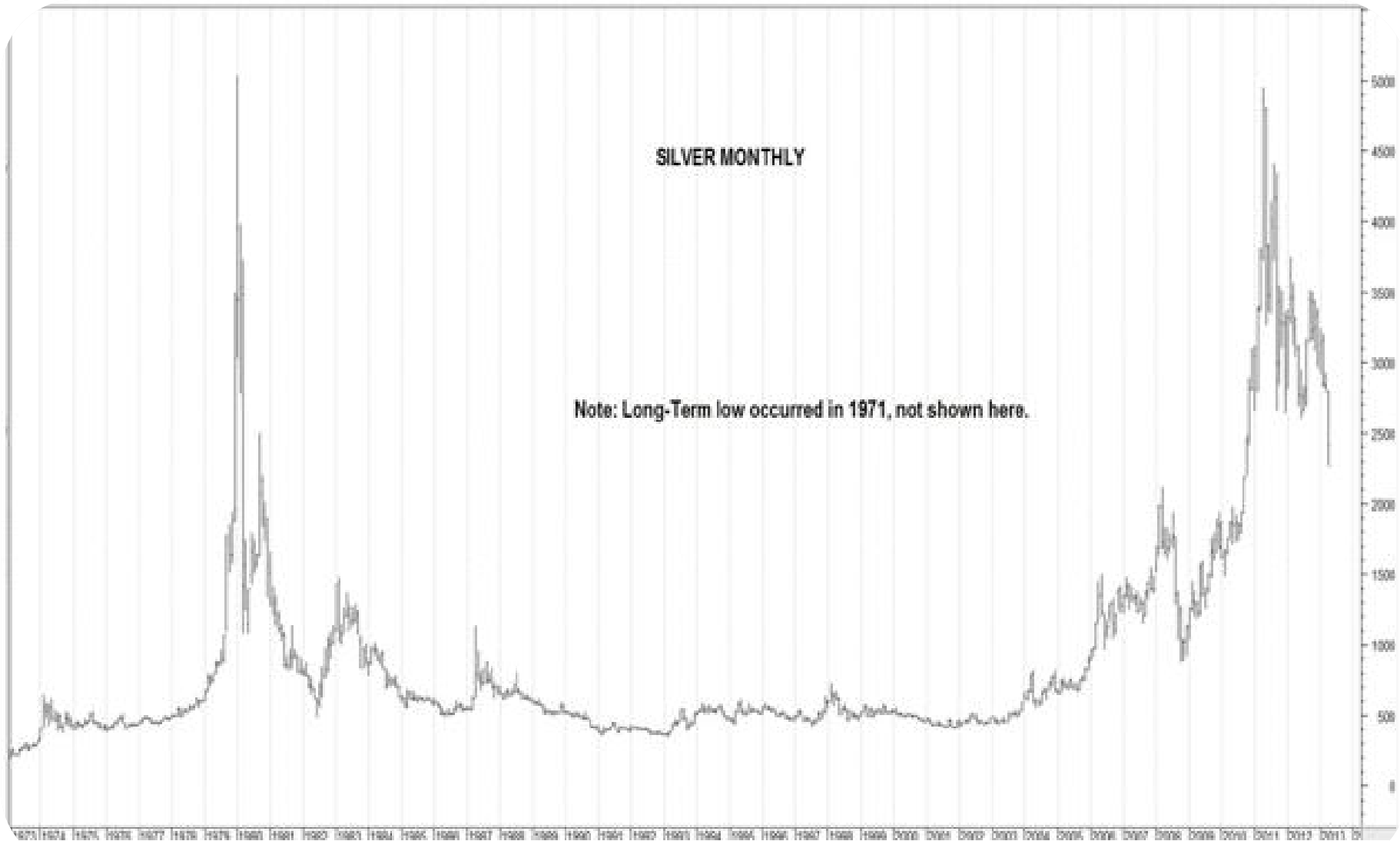


Can you identify the longest-term cycle in Corn and its phases of at least 18 years?



LONG TERM SILVER





WHEAT

2013

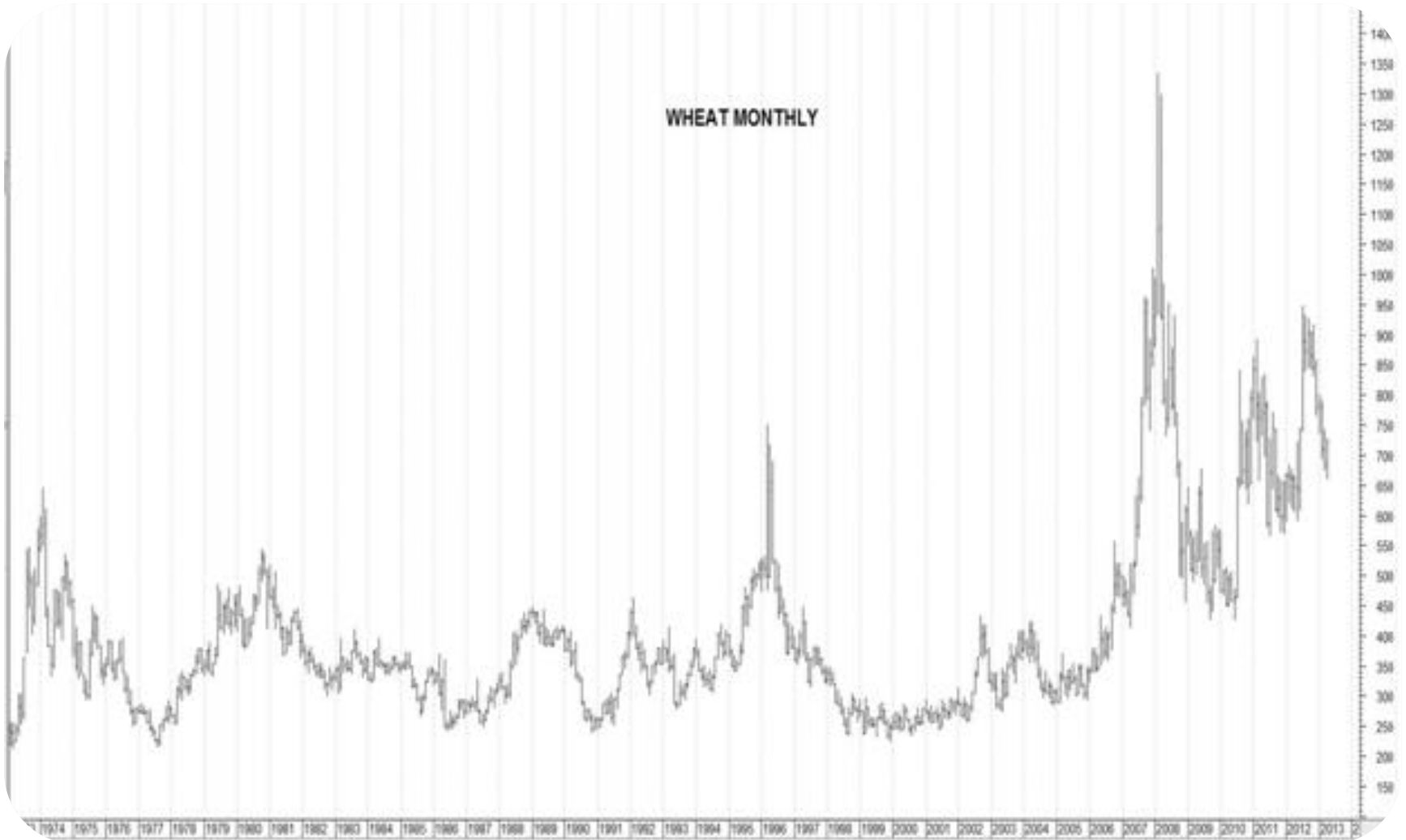
Long Term Monthly History

US cents per bushel

Latest = 688

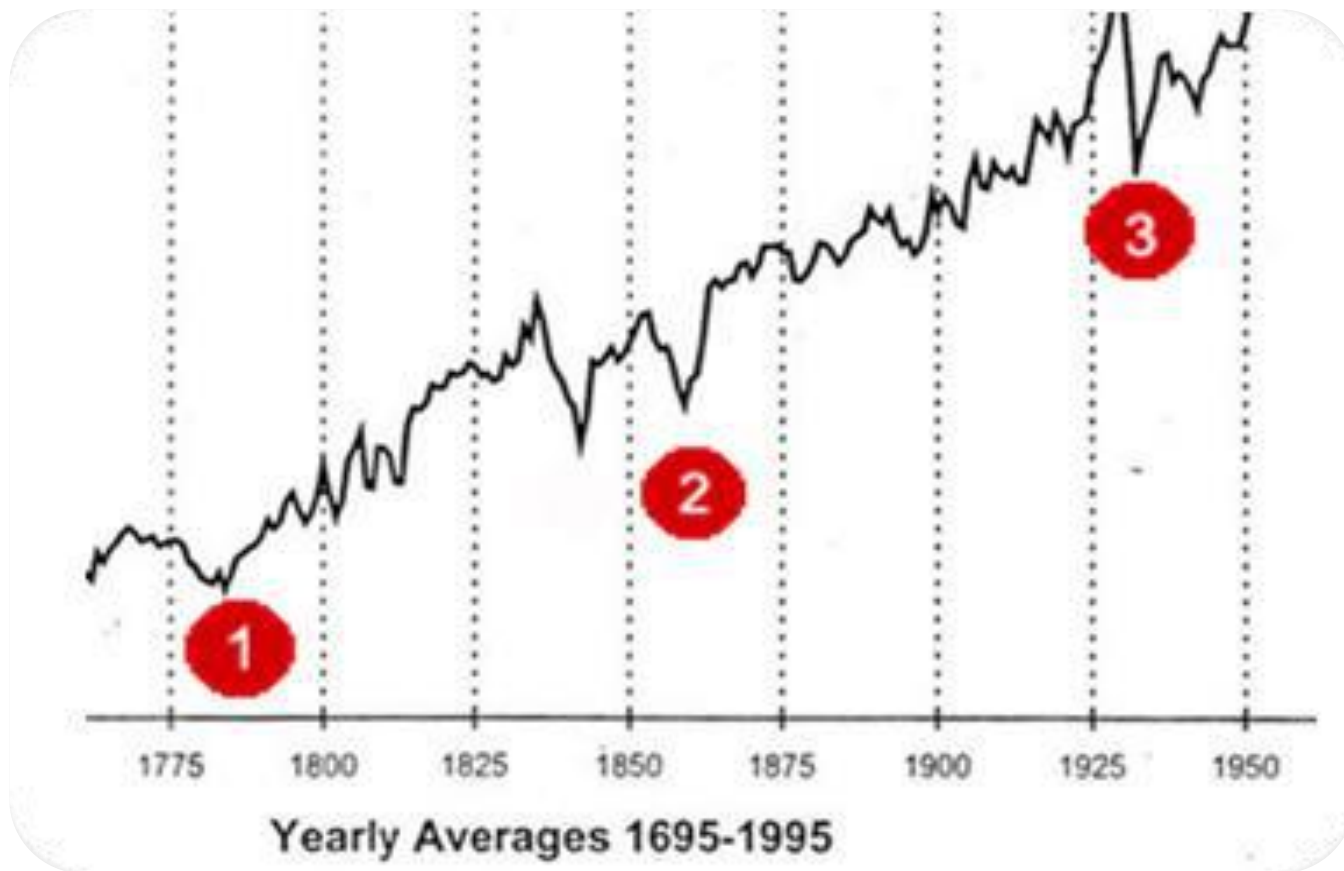


world gold charts © www.sharelynx.com



Your assignment for this exercise is as follows:

1.) Identify the long-term cycle troughs and crests that stand out. *Use a graphic like this*



2.) Determine all the phases that are 18-years or greater

3.) Determine the sign positions (and degrees) of Pluto, Neptune and Uranus to these long-term cycle lows and highs. Also, list the signs and degrees of Saturn and the Moon's North Node

a.) You may have to approximate the month of these cycles. If unsure, use July 1.

If it appears a low or high unfolds at the same price the following year, then use December 31 of the first of the two years

b.) Input these dates into your astrological software program to determine planetary positions

New Chart Data Entry

Chart Name

Comments

How

Date May 29 2013

.	.	.
.	.	.

0 Chrs

Event Type

Time

1:52:14 pm

Life Events

0 Events

Place

SOUTHFIELD

Auto Lookup

House System

Zodiac

Country/State

Mi

Coordinate System

Zone

EDT +4:00

Default Place

Save

Restore

Source Rating

Latitude

42°N28'24"

Longitude

083°W13'15"

Source Description

Quit

OK More

OK

4.) Deduce if there are any correlations between these signs (check by quality and element) or degree segments of the zodiac, and these long-term market cycles

If you are choosing Treasuries, understand that the higher the rates, the lower the Bond price

You may use a Metastock monthly chart of T-Bonds or T-Notes to refine your study in times that are more recent

We will focus on Wheat as a group at the end of this exercise.

QUIZ #12

Applying Long-Term Planet-Sign Correlations to Other Financial Markets

1.) What are the longer-term cycles of Corn and its phases?

2.) What are the longer-term cycles of Wheat and its phases?

3.) Identify the dates (years and month, if possible) of all long-term Wheat cycle troughs and their secondary lows

4.) When is the next long-term cycle trough due?

5.) What correlation do these lows share with Pluto's cycle?

6.) What correlation do they share in common with Neptune's cycle?

7.) What correlation do they share in common with Uranus's cycle?

8.) What correlation do they share in common with Saturn's cycle?

9.) Are there any correlations with the North Node of the Moon?

10.) When did the long-term cycle crests in Wheat - and any secondary highs - unfold?

11.) What correlation do these lows share with Pluto's cycle?

12.) What correlation do they share in common with Neptune's cycle?

13.) What correlation do they share in common with Uranus's cycle?

14.) What correlation do they share in common with Saturn's cycle?

15.) Are there any correlations with the North Node of the Moon?

End of Module Lesson

Break